



# Count and Write !


Count on from the given number. Take care to form your numbers correctly.

Name: \_\_\_\_\_

Teacher: \_\_\_\_\_

Grade & Section: \_\_\_\_\_

Date: \_\_\_\_\_



21

24

28

30

33

37

42

87

89

91

92

95

9

11

14

18

98

102

103

104

107





# Math Masters Minds !

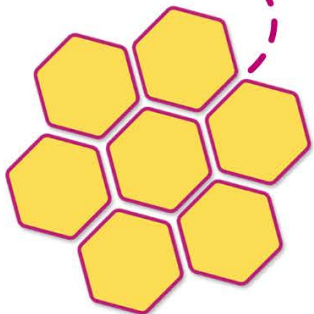
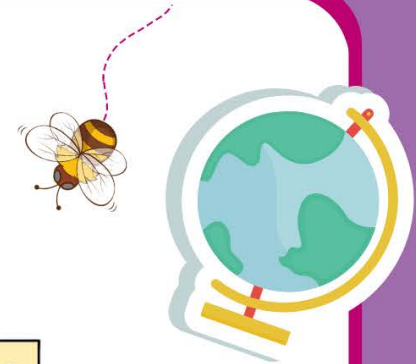
Solve this Numeric puzzle game and write down the answer.

Name: \_\_\_\_\_ Teacher: \_\_\_\_\_  
Grade & Section: \_\_\_\_\_ Date: \_\_\_\_\_

HI! MY NAME IS,  
BITTY-BEE. I THINK  
MATH IS COOL, DO  
YOU TOO?



15	+	17	=			
				-		
				20		
	-	3	=	11		
	7					9
	=					+
		+	21	=		
				-		=
						38
			=			
		+	20	=	27	



# Domino Number Bonds !

Circle the correct answer of each card.

Name: \_\_\_\_\_

Teacher: \_\_\_\_\_

Grade & Section: \_\_\_\_\_

Date: \_\_\_\_\_

